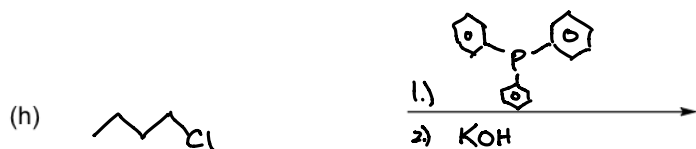

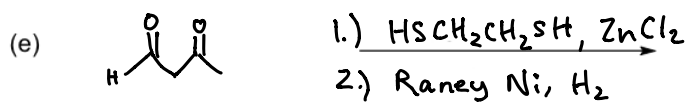
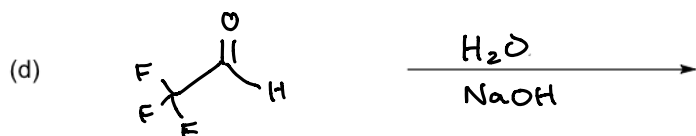


1. (32 pts) Predict the structure(s) of the expected major organic product(s). Unless mentioned otherwise, assume that all reagents are present in one mole equivalence. Show stereochemistry where needed and write NR if there is no reaction.



1. (32 pts) Predict the structure(s) of the expected major organic product(s). Unless mentioned otherwise, assume that all reagents are present in one mole equivalence. Show stereochemistry where needed and write NR if there is no reaction.

